

Compare objects

- 1 Dora and Ron each have some building bricks.



- a) How many bricks does Dora have?

Dora has bricks

- b) How many bricks does Ron have?

Ron has bricks.


- c) Who has the greater number of bricks?

_____ has the greater number of bricks.

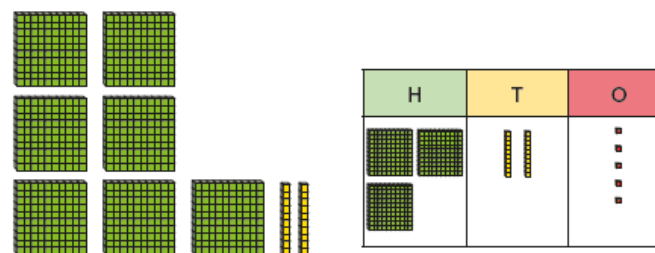
How do you know?

- 2 Tick the greater number in each pair.

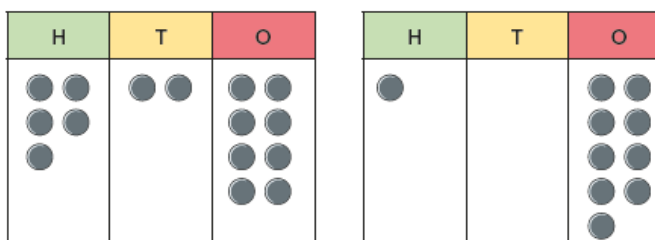
a)



b)



c)



d)

