



Counting in 50s

I How many cards does each person have?

Filip	Eva	Mo	Aisha
			

11

11

Teddy has 8 packs of cards.

How many cards does Teddy have?

Teddy has		cards.
-----------	--	--------

2 Complete the number tracks.

200	250	300					550
-----	-----	-----	--	--	--	--	-----

650		750	800				
-----	--	-----	-----	--	--	--	--

	600	550		450			300
--	-----	-----	--	-----	--	--	-----

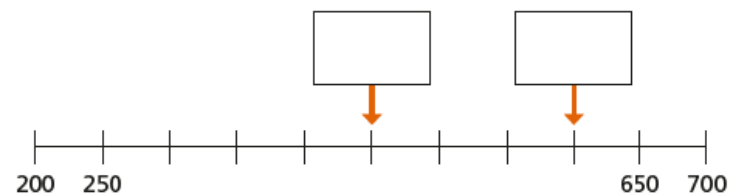
3 Rosie is counting up in 50s from 0 to 1,000



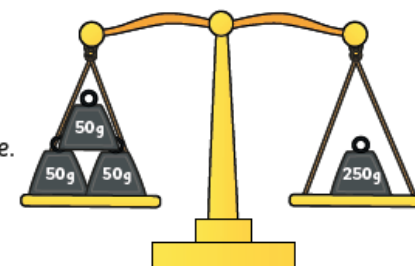
Circle all the numbers that Rosie will say.

505 750 75 350 240 800 950

4 What numbers are the arrows pointing to? Label the arrows.



5 Is this true or false?
These scales will balance.



How do you know?